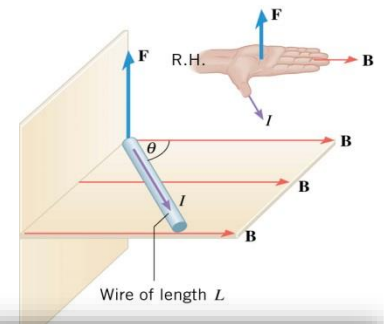


Force on a Current-Carrying Wire in B-field

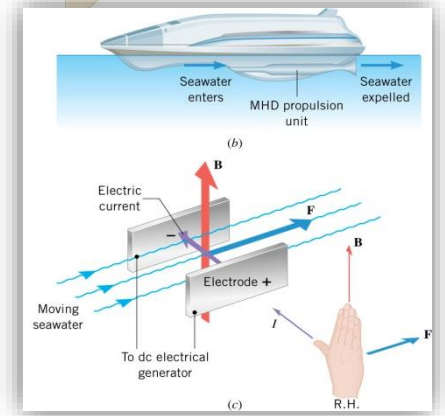
- Direction Follows _____
- $F = ILB \sin \theta$

A 2 m wire is in a 2×10^{-6} T magnetic field pointing into the page. It carries 2 A of current flowing up. What is the force on the wire?



Magnetohydrodynamic Propulsion

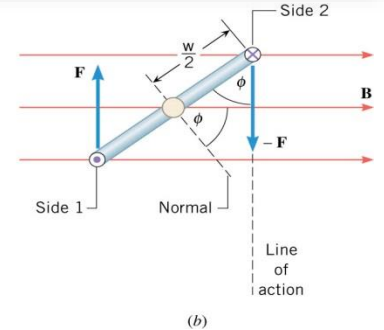
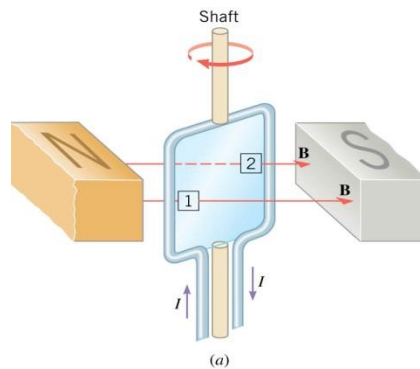
- Way to _____ boats with _____ moving parts
- _____ enters tube under ship
- In the tube are electrodes that run _____ through the water
- Also in the tube is a strong _____ field created by _____
- The interaction with the electric _____ and _____ push the _____ out the back of the tube which pushes boat forward
- $F = ILB \sin \theta$



Torque on a Current Loop in B-field

What happens when you put a loop of wire in a magnetic field?

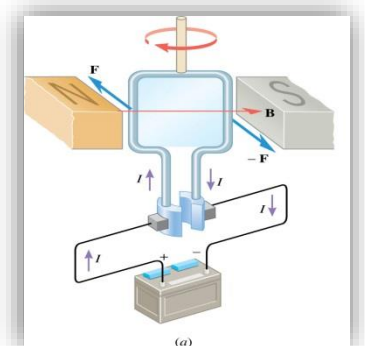
- Side 1 is forced _____ and side 2 is forced _____ (RHR)
- This produces a _____
- The loop turns until its normal is _____ with the B-field
- Torque on Loop of Wire
 - $\tau = NIAB \sin \phi$
 - Where N = Number of loops, I = Current, A = Area of loop, B = Magnetic Field, ϕ = Angle between normal and B-field
 - NIA = Magnetic _____
 - Magnetic _____ \uparrow , torque \uparrow



A simple electric motor needs to supply a maximum torque of 10 Nm. It uses 0.1 A of current. The magnetic field in the motor is 0.02 T. If the coil is a circle with radius of 2 cm, how many turns should be in the coil?

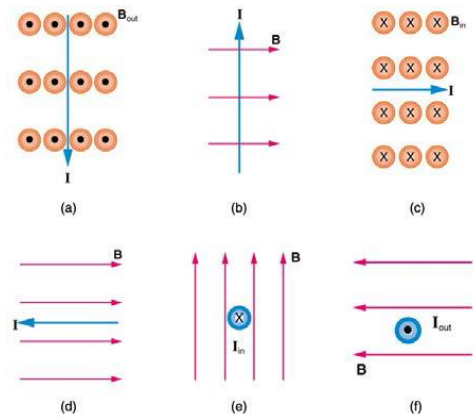
Electric Motor

- Many loops of _____-carrying wire placed between two _____ (B-field)
- The loops are attached to _____
- The _____ turns the _____ until the normal is _____ to B-field
- At that point the half-rings _____ connect to electric _____
- _____ makes the loop turn more
- The half-rings _____ with the current to _____ the process

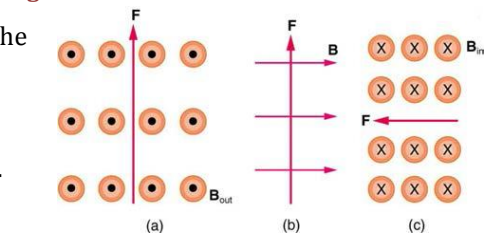


Homework

- Why would a magnetohydrodynamic drive work better in ocean water than in fresh water? Also, why would superconducting magnets be desirable?
- Which is more likely to interfere with compass readings, AC current in your refrigerator or DC current when you start your car? Explain.
- What is the direction of the magnetic force on the current in each of the six cases in Figure 1? (OpenStax 22.31) **left, into, up, no, right, down**

**Figure 1**

- What is the direction of a current that experiences the magnetic force shown in each of the three cases in Figure 2, assuming the current runs perpendicular to B ? (OpenStax 22.32) **left, out, up**
- (a) What is the force per meter on a lightning bolt at the equator that carries 20,000 A perpendicular to the Earth's 3.00×10^{-5} -T field? (b) What is the direction of the force if the current is straight up and the Earth's field direction is due north, parallel to the ground? (OpenStax 22.34) **0.600 N/m, West**

**Figure 2**

- (a) A DC power line for a light-rail system carries 1000 A at an angle of 30.0° to the Earth's 5.00×10^{-5} -T field. What is the force on a 100-m section of this line? (b) Discuss practical concerns this presents, if any. (OpenStax 22.35) **2.50 N, must attach them**
- What force is exerted on the water in an MHD drive utilizing a 25.0-cm-diameter tube, if 100-A current is passed across the tube that is perpendicular to a 2.00-T magnetic field? (The relatively small size of this force indicates the need for very large currents and magnetic fields to make practical MHD drives.) (OpenStax 22.36) **50.0 N**
- A wire carrying a 30.0-A current passes between the poles of a strong magnet that is perpendicular to its field and experiences a 2.16-N force on the 4.00 cm of wire in the field. What is the average field strength? (OpenStax 22.37) **1.80 T**
- (a) What is the maximum torque on a 150-turn square loop of wire 18.0 cm on a side that carries a 50.0-A current in a 1.60-T field? (b) What is the torque when ϕ is 10.9° ? (OpenStax 22.42) **389 Nm, 73.5 Nm**
- Find the current through a loop needed to create a maximum torque of 9.00 N·m. The loop has 50 square turns that are 15.0 cm on a side and is in a uniform 0.800-T magnetic field. (OpenStax 22.43) **10.0 A**
- Calculate the magnetic field strength needed on a 200-turn square loop 20.0 cm on a side to create a maximum torque of 300 N·m if the loop is carrying 25.0 A. (OpenStax 22.44) **1.50 T**
- A proton has a magnetic field due to its spin on its axis. The field is similar to that created by a circular current loop 0.650×10^{-15} m in radius with a current of 1.05×10^4 A (no kidding). Find the maximum torque on a proton in a 2.50-T field. (This is a significant torque on a small particle.) (OpenStax 22.47) **3.48×10^{-26} Nm**